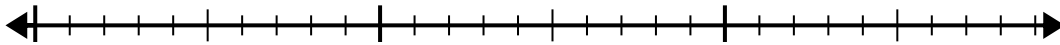




Use the number line to solve the division problem.

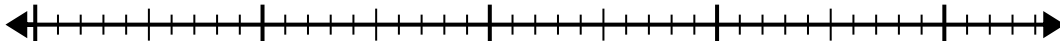
1) $25 \div 6 =$
0

25



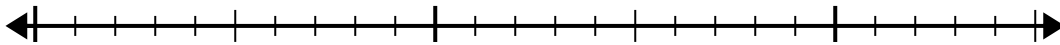
2) $38 \div 7 =$
0

38



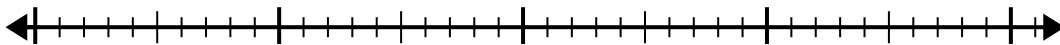
3) $20 \div 6 =$
0

20



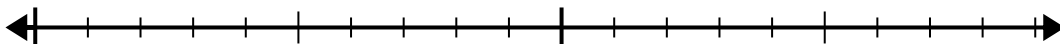
4) $35 \div 6 =$
0

35



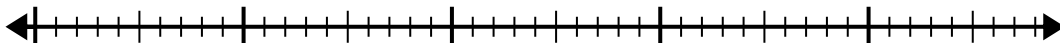
5) $18 \div 5 =$
0

18



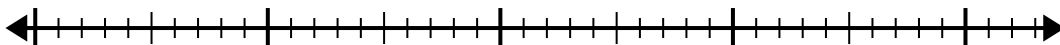
6) $46 \div 6 =$
0

46



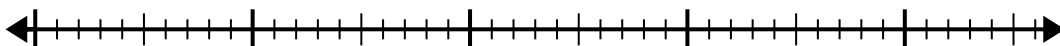
7) $34 \div 7 =$
0

34



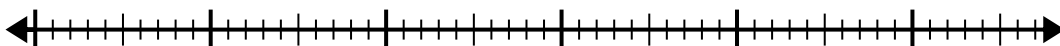
8) $45 \div 7 =$
0

45



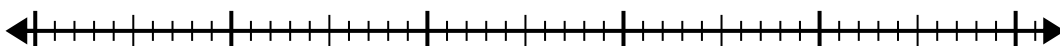
9) $53 \div 8 =$
0

53



10) $50 \div 6 =$
0

50



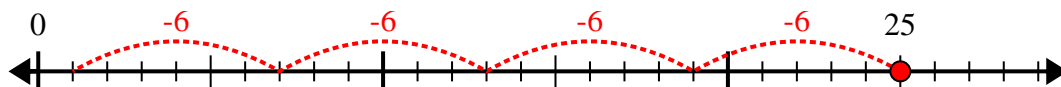
Answers

1. _____
2. _____
3. _____
4. _____
5. _____
6. _____
7. _____
8. _____
9. _____
10. _____



Use the number line to solve the division problem.

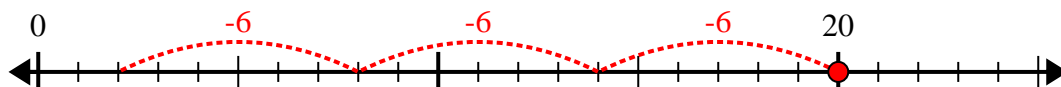
1) $25 \div 6 =$



2) $38 \div 7 =$



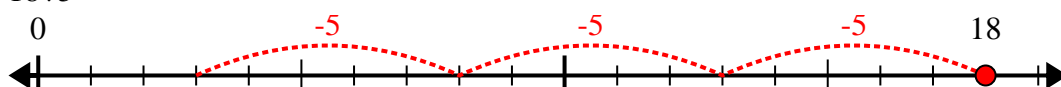
3) $20 \div 6 =$



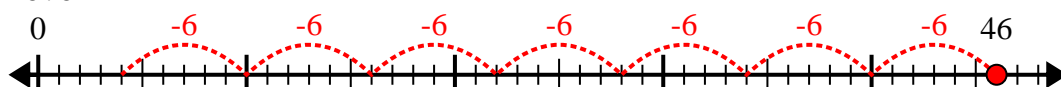
4) $35 \div 6 =$



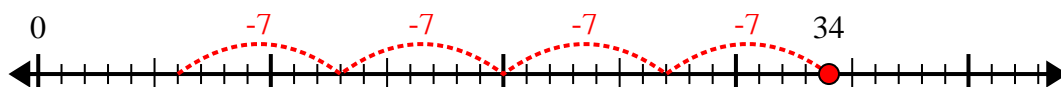
5) $18 \div 5 =$



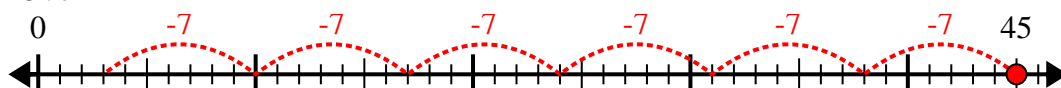
6) $46 \div 6 =$



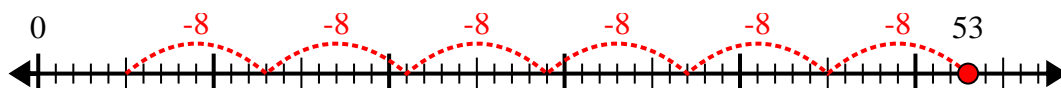
7) $34 \div 7 =$



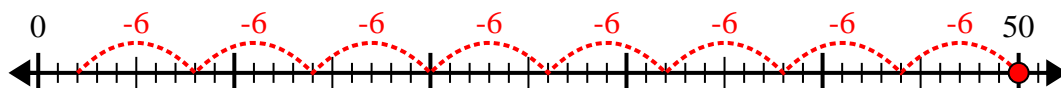
8) $45 \div 7 =$



9) $53 \div 8 =$



10) $50 \div 6 =$



Answers

1. 4r1

2. 5r3

3. 3r2

4. 5r5

5. 3r3

6. 7r4

7. 4r6

8. 6r3

9. 6r5

10. 8r2